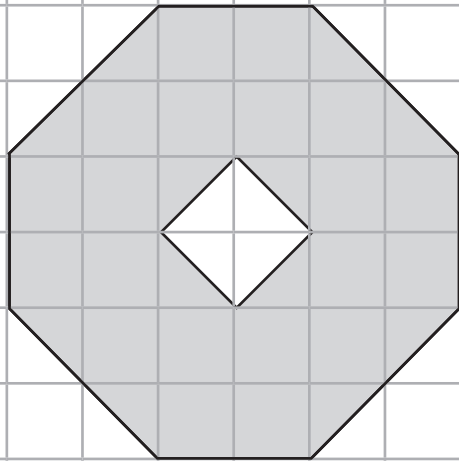


Area of Compound Shapes - Find the Area of the Shape

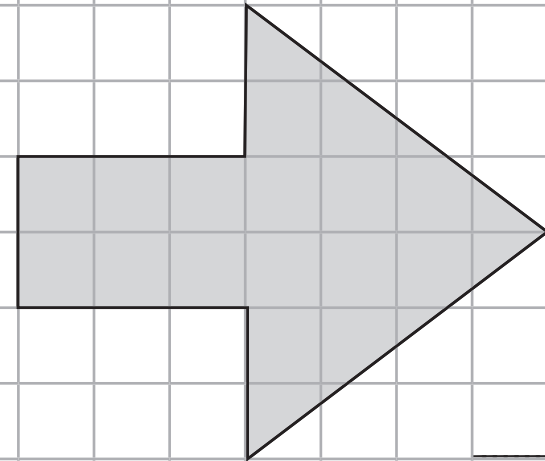
1.



_____ cm²

Area of Compound Shapes - Find the Area of the Shape

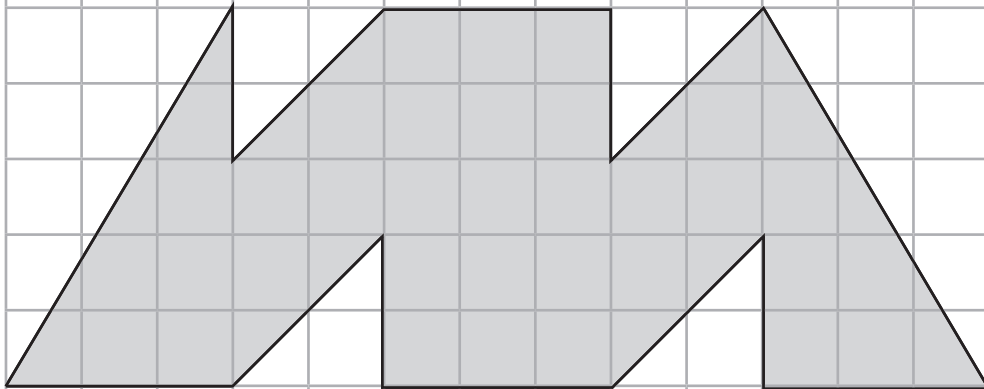
2.



_____ cm²

Area of Compound Shapes - Find the Area of the Shape

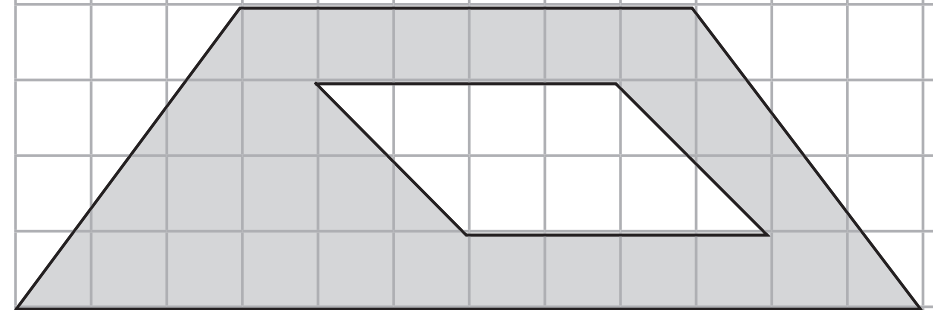
3.



_____ cm²

Area of Compound Shapes - Find the Area of the Shape

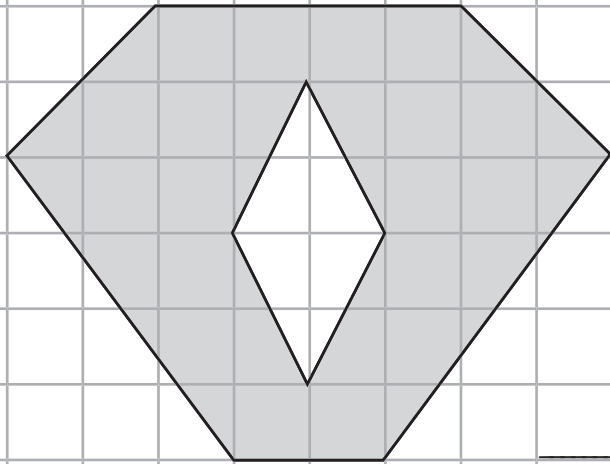
4.



_____ cm²

Area of Compound Shapes - Find the Area of the Shape

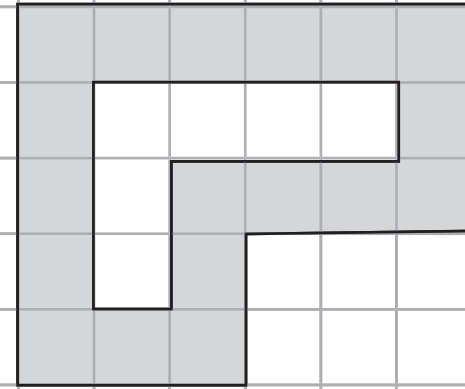
5.



_____ cm²

Area of Compound Shapes - Find the Area of the Shape

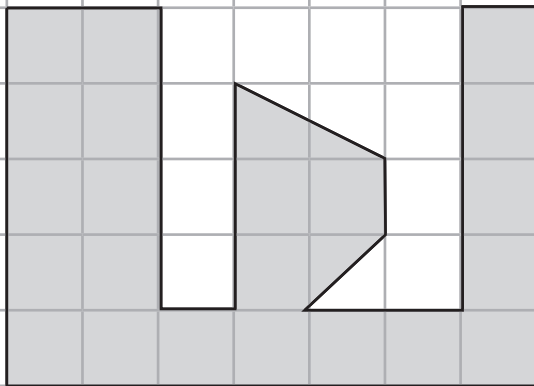
6.



_____ cm²

Area of Compound Shapes - Find the Area of the Shape

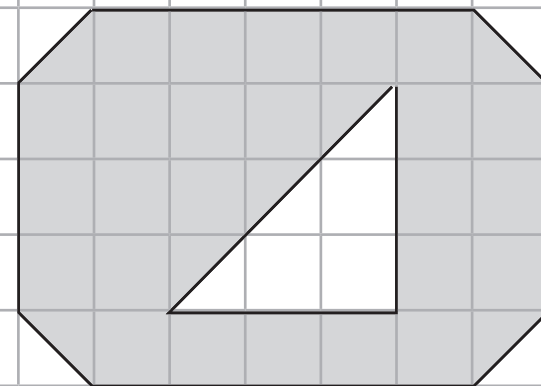
7.



_____ cm²

Area of Compound Shapes - Find the Area of the Shape

8.



_____ cm²

Area of Compound Shapes - Answer Card

1. 26cm^2
2. 18cm^2
3. 42cm^2
4. 28cm^2
5. 28cm^2
6. 18cm^2
7. $23\frac{1}{2}\text{cm}^2$
8. $28\frac{1}{2}\text{cm}^2$